

MC-6
PGDGA
TEST PAPER-2010

2001

TIME : 03.00 Hrs

TOTAL MARKS : 200

Date of Entrance Test (To be filled IN by the Candidate)

(Signature of Invigilator)

INSTRUCTIONS

Please read the following instructions **CAREFULLY** before you begin answering the question paper.

1. Write your Roll Number in the space marked for it.
2. Do not write your name on the answer sheet.
3. The question paper is divided into **four** sections (**Drawing Skills, Visual Intelligence, Aptitude, Visualization Skills**). You must attempt questions from all sections. Marks for each questions are mentioned with that particular question.
4. The answer to each question must be written in the **space designated under that particular question**, on the question paper itself. Answer written in wrong spaces will not be evaluated. All answers must be using black pencil/pen only. You may not use colour.
5. If an additional sheet is used to answer any question, write **the correct question number clearly** on the additional sheet. Put **page numbers** on each additional sheet.

Code No. (To be filled in by the office)

Total Marks Obtained
Signature

(Exam Suprintendent)

cut cut cut cut cut

MC-6
PGDGA
TEST PAPER-2010


Roll No. Signature of Candidate

(To be filled in by the Candidate)

Code No. (To be filled in by the Office)

Section 1: Drawing Skills (Total marks 80)


1. Draw any 5 objects (e.g. protractor, divider, sharpener, ruler, compass, set-square etc.) found in a typical geometry box. You will be evaluated for your ability in depicting a 3-dimensional object. Please note that these drawings **MUST** be freehand. Using tools like a scale etc. will disqualify your answer. **Marks 15**



2. Illustrate any 5 of the following by using any or all of the following geometric shapes – circle, square, rectangle, triangle, straight lines in the boxes provided below. You can fill black with pencil where needed. Using icons, symbols or illustrations will disqualify your answer. **Marks 20**

Anger Depression Trust Peace Loyalty
Want Hunger Bonding Jealousy Hope

3. Draw a vegetable vendor with his cart (thela) of vegetables in the space provided below : **Marks 10**



4. Look at the following photograph and make 2 freehand drawings of the top and side views of the object. **Marks 10**




--	--


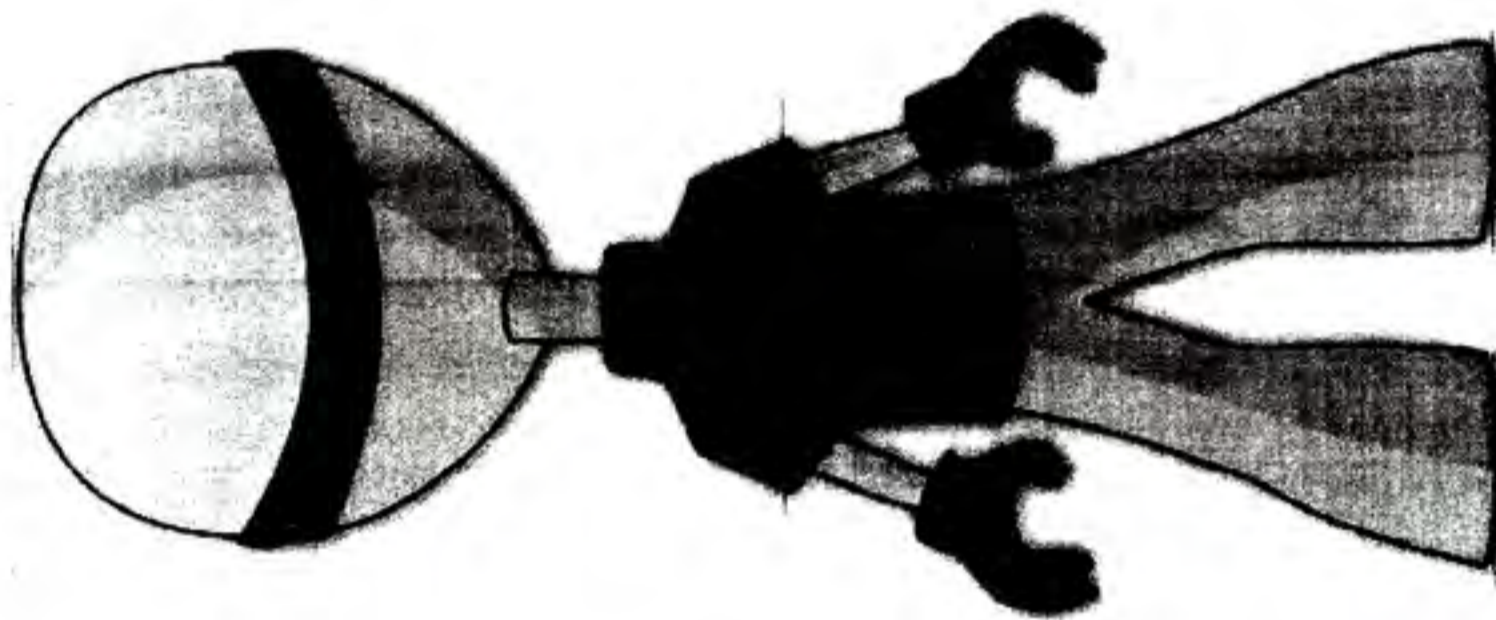
TOP VIEW

SIDE VIEW

5. Create a flip book (sequence of images previewed in succession giving an illusion of motion) in the right hand corner on the back of this booklet on each sheet. Use the space provided below for rough work. **Marks 15**



6. Draw the character shown below in side profile in the space provided below :
Marks 10

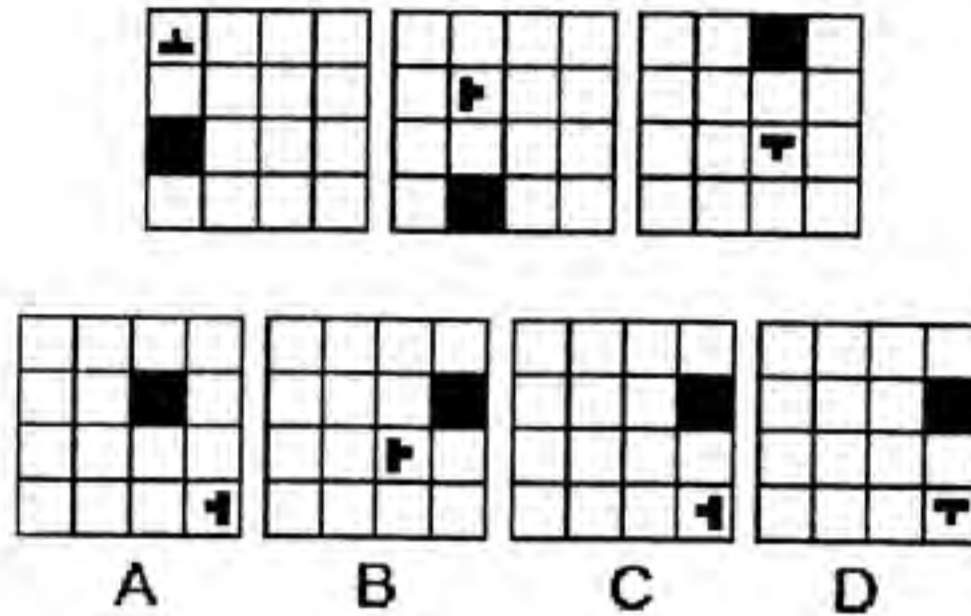


Section 2 : Visual Intelligence (Total marks 25)

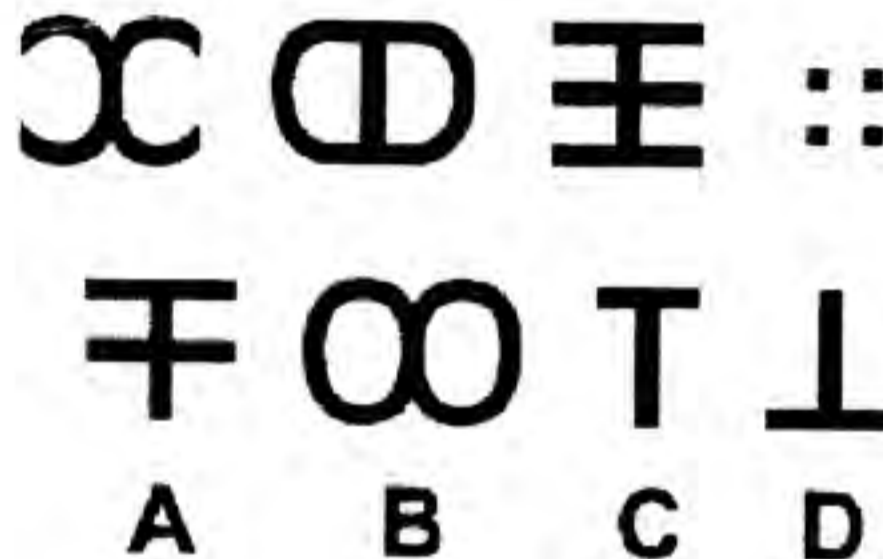
Question 7 – 11 are 2 marks each

10 marks

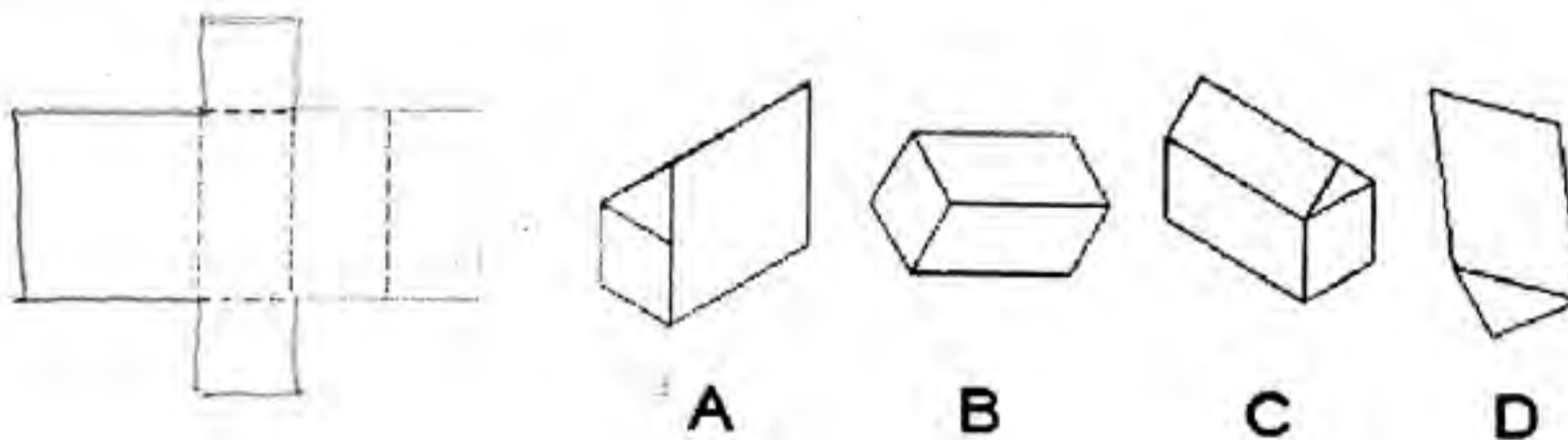
7. Find the picture that follows logically from the diagrams to the right.



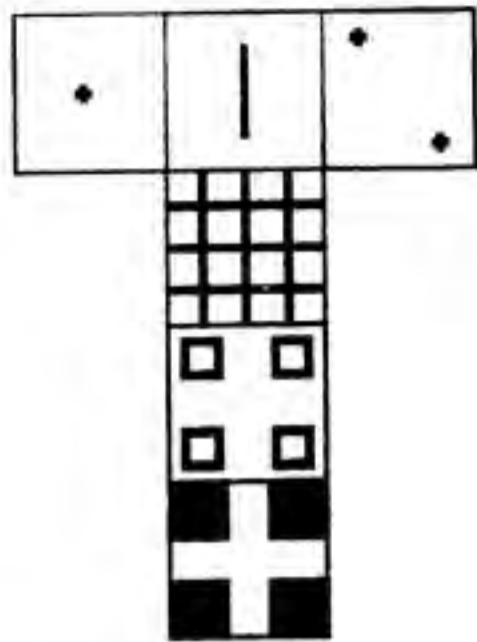
8. Which of the diagrams follows?



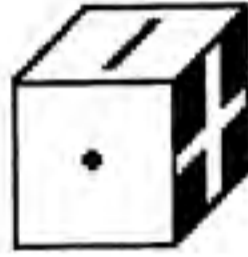
9. Which diagram results from folding the diagram on the left?



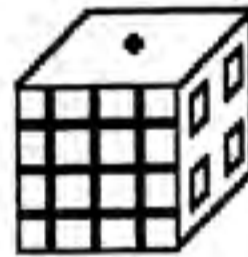
10. Which of the cubes is the same as the unfolded cube below?



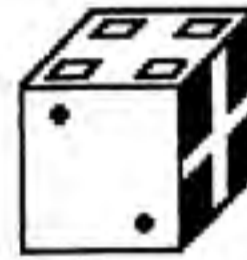
A



B

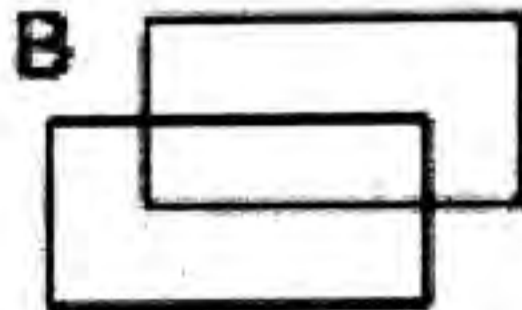
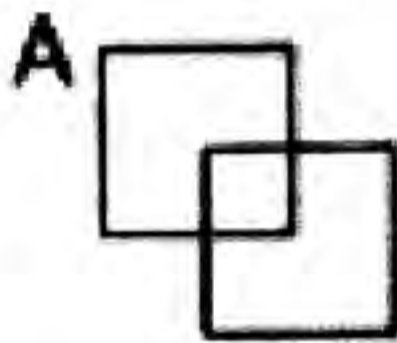


C

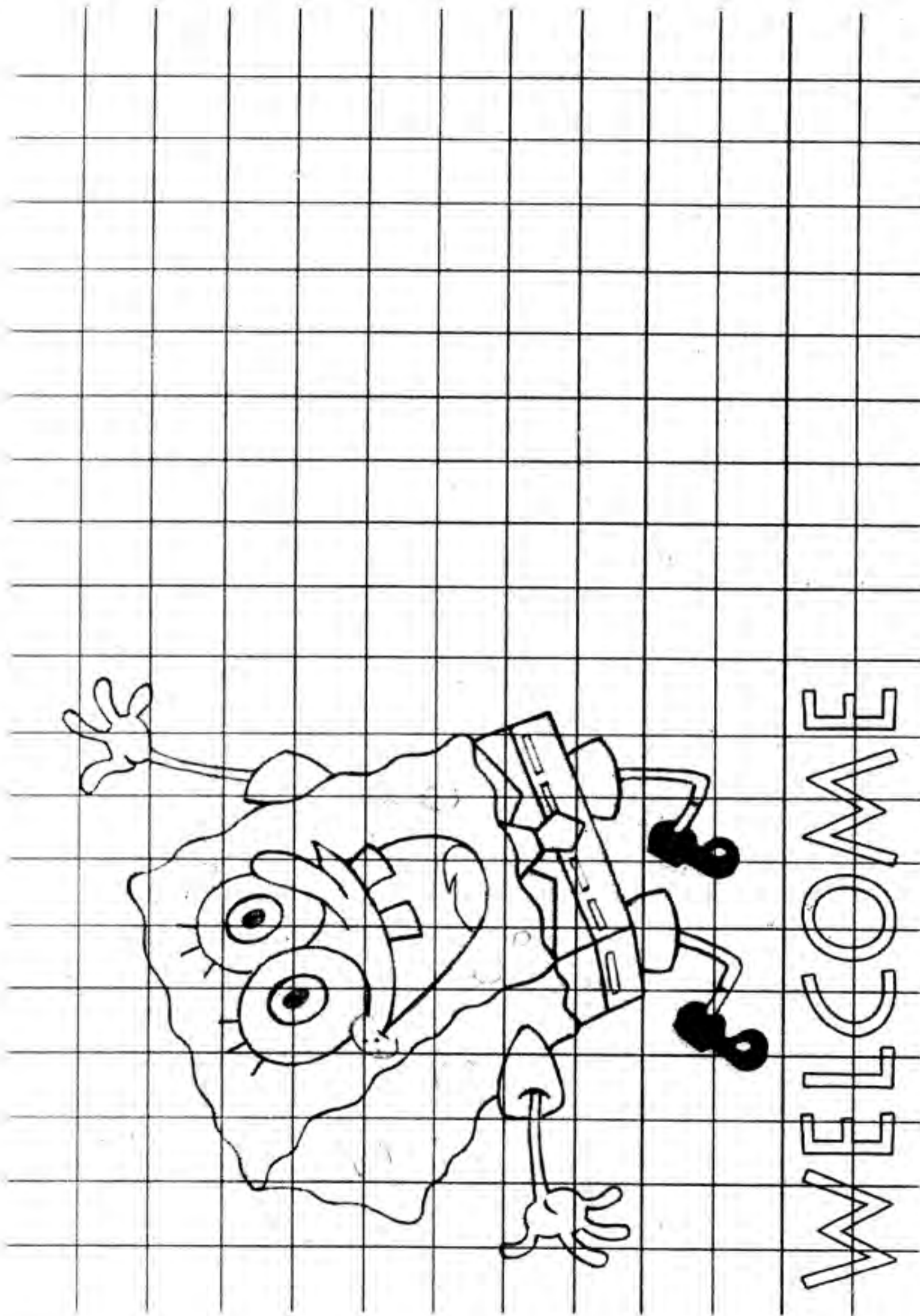


D

11. Which of the following diagrams is the odd one out?



12. Draw the character below as it would appear reversed in mirror with the help of grid lines. If you fold and mirror the image by tracing you will disqualify your answer. **Marks 15**



Section 3 : Aptitude (Total marks 50)

Circle the correct one :

Each Question carries 2 marks.

Marks 40

- | | |
|------------|---|
| 13. | Which animated movie won the Oscar for best Animated Feature in 2009?
(a) Coraline
(b) Fantastic Mr. Fox
(c) The Princess and the Frog
(d) The Secret of Kells
(e) Up |
| 14. | What does the alphabet R stand for in RGB
(a) Ratio
(b) Red
(c) Render
(f) Rig |
| 15. | Which one of the following is not a vector based software
(a) Adobe Illustrator
(b) Corel Draw
(c) Adobe Photoshop
(d) Quark Express |
| 16. | Which one of the following is used for architectural drawing
(a) HB
(b) 2H
(c) 2B
(d) 6B |
| 17. | Pixel Art used for Mobile Gaming is created using which of the following software
(a) Vector Graphics software
(b) Raster graphics software
(c) Compositing software
(d) 3D Graphics software |

18.	<p>PAL video format is used in</p> <p>(a) Sri Lanka (b) Japan</p> <p>(c) USA (d) South Korea</p>
19.	<p>The famous animated characters Tom & Jerry were created by</p> <p>(a) Jim MacDonald & Ollie Johnston (b) William Hanna and Joseph Barbera</p> <p>(c) Jon Lasseter & Pete Doctor (d) Ub Iwerks and Walt Disney</p>
20.	<p>Who is the creator of the famous cartoon character, 'The Common Man'</p> <p>(a) Sudhir Dar (b) Mario Miranda</p> <p>(c) R. K. Laxman (d) Ajit Ninan</p>
21.	<p>The film, 'Roadside Romeo' was produced by Walt Disney along with which Indian production house?.</p> <p>(a) Mukta Arts (b) Dharma Productions</p> <p>(c) Yash Raj Films (d) Red Chillies Entertainment</p>
22.	<p>What is the name of the mascot of the Commonwealth Games, 2010</p> <p>(a) Sheru (b) Sher Khan</p> <p>(c) Shera (d) Appu</p>
23.	<p>The full form of LCD is</p> <p>(a) Light Clear Display (b) Liquid Crystal Display</p> <p>(c) Light Cast Digital (d) Lithium Crystal Digital</p>

24. 'Chacha Chaudhary' the comic book, is published by which Indian publisher?

(a) Amar Chitra Katha

(b) Chandamama

(c) Diamond Comics

(d) Indrajal Comics

25. Under Windows OS, which key combination do you press to get the Task Manager?

(a) Shift + Space + Del

(b) Ctrl + Alt + Del

(c) Shift + Alt + Del

(d) Tab + Ctrl + Alt

26. What colour from the following is used for Chromakey in Visual effects

(a) Yellow

(b) Red

(c) Green

(d) Gray

27. What is the name of the town where Archie and his friends live?

(a) Rockdale

(b) Riverville

(c) Riverdale

(d) Pop Tate's

28. Out of the following artists, pick the sculptor

(a) M. F. Husain

(b) F. N. Souza

(c) Ram Kumar

(d) Satish Gujral

29. In Tom & Jerry cartoons, what is the name of the bulldog who chases Tom?

(a) Mike

(b) Spike

(c) Sylvester

(d) Sam

30. 'Chota Bheem' the animated TV series is telecast on which channel?
(a) Doordarshan (b) Hungama
(c) Pogo (d) Playhouse Disney
(e)

31. What is the name of Mickey Mouse's dog?
(a) Spike (b) Odie
(c) Pluto (d) Snoopy

32. What is the name of the director of Toy story?
(a) John Lasseter (b) Walt Disney
(c) Tim Burton (d) Pete Doctor

33. Give names of two recent Indian films using visual effects with brief descriptions of any two shots from the film. **Marks 4**

.....
.....
.....
.....
.....
.....
.....
.....
.....

Answer the following questions (each question carries 1 mark)

Marks 6

34. Which well known Indian car was withdrawn from 13 cities following Bharat Stage 4 emission norms coming into force from April, 2010.

.....
.....

35. CERN (The European Organisation for Nuclear Research) has finally shown some success in an experiment to recreate conditions surrounding the Big Bang, which experts believe gave birth to the universe. What is the name of the machine they are using?

.....
.....

36. Who is the founder of the IT company, Infosys?

.....
.....

37. Name the town in Maharashtra which is famous for being the starting point to visit the Ajanta and Ellora caves?

.....
.....

38. Who was the first Indian writer to win the Booker prize for Fiction?

.....
.....

39. Which is the first Indian Rock band that sings in Malayalam?

.....
.....

41. Draw 2 illustrations based on the story below :

Marks 20

The Fox and the Crane

The fox invited the crane to dinner and served the meal on a plate.

The crane could not pick up anything with his long beak, and the fox ate everything herself.

Next day the crane invited the fox and served dinner in a jug with a narrow neck.

The fox could not get her nose into the jug, but the crane stuck his long neck in and drank everything herself.

